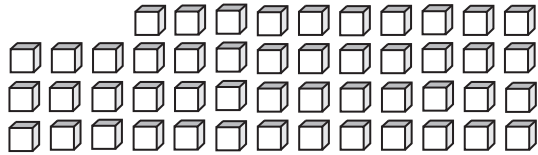


Tens & Ones

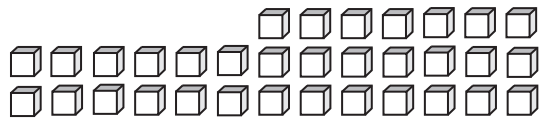
How many tens can you form? Also find the ones that left over.

1)



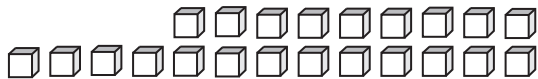
_____ tens _____ ones

2)




_____ tens _____ ones

3)




_____ tens _____ ones

4)



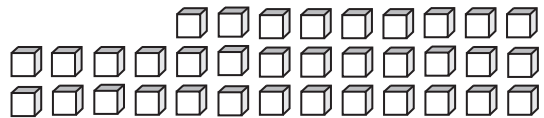
_____ tens _____ ones

5)



_____ tens _____ ones

6)



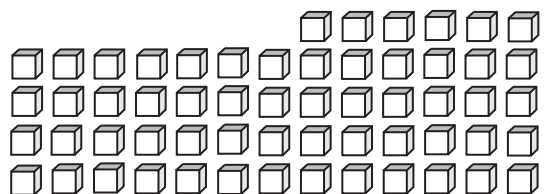
_____ tens _____ ones

7)



_____ tens _____ ones

8)

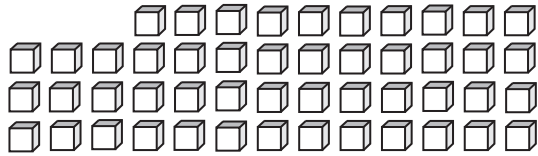


_____ tens _____ ones

Answer key

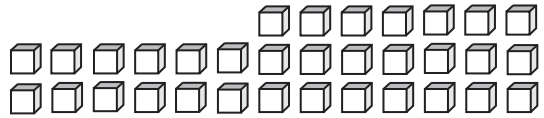
How many tens can you form? Also find the ones that left over.

1)



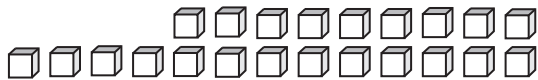
 4 tens 9 ones

2)




 3 tens 3 ones

3)



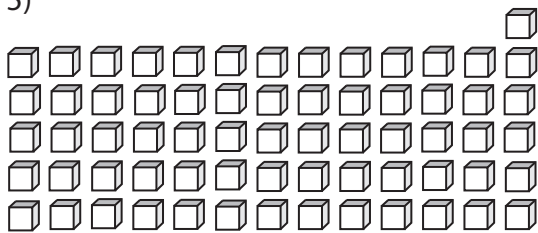
 2 tens 2 ones

4)



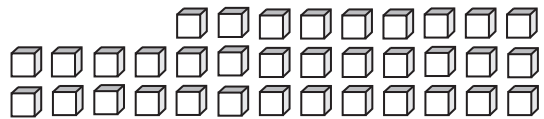
 7 tens 0 ones

5)



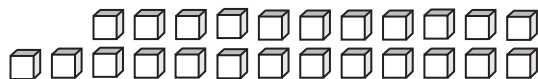
 6 tens 6 ones

6)



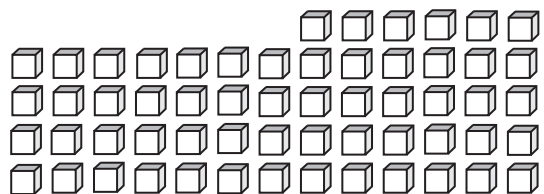
 3 tens 5 ones

7)



 2 tens 4 ones

8)



 5 tens 8 ones